

ANNUAL PROMOTION EXAMINATION – 2019

CLASS – VII

MATHEMATICS

Time: 2:30 Hrs

Max Marks: 80

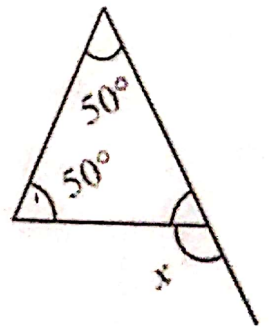
Note:

1. All questions are compulsory. There is internal choice in a few questions.
2. Answer the questions in serial order as far as possible.

Section A

[Each question carries 1 mark]

1. Find 15% of 250.
2. Find the standard form of rational number $\frac{-18}{-45}$
3. Find the area of a square park whose perimeter is 320 m.
4. Convert 50 cm^2 in mm^2 .
5. Get the algebraic expression for: Number 5 added to three times the product of number m and n.
6. Show the terms and factors by tree diagram: $5xy^2 + 7x^2y$
7. Express 3125 using exponential notation
8. Simplify and write in Exponential Notation $(7^{50})^2$
9. Find the value of x in the following diagram:
10. Find the circumference of a circle with radius 28mm. (Take $\pi = \frac{22}{7}$)



Section B

[Each question carries 2 marks]

11. Convert into percentage:
(i) 0.75 (ii) 0.09
12. Find $\frac{5}{63} - \left(\frac{-6}{21}\right)$
13. Five 4 rational numbers equivalent to $\frac{-2}{7}$
14. Construct $\triangle ABC$ with $BC = 7.5 \text{ cm}$, $AC = 5 \text{ cm}$ and $m\angle C = 60^\circ$

sheet. (Take $\pi = 22/7$)

17. Add : $3mn$, $-5mn$, $8mn$, $-4mn$

18. What should be the value of 'a' if the value of $2x^2 + x - a$ equals to 5, when $x = 0$?

OR

If $z=10$, find the value of: $z^3 - 3(z-10)$

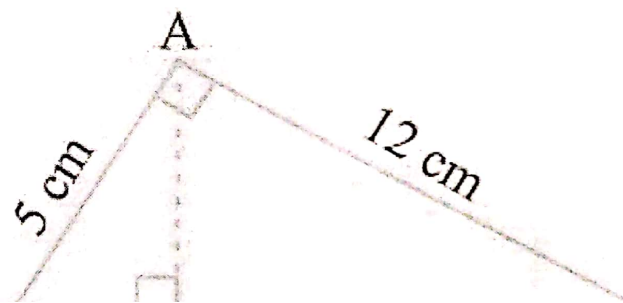
19. Using laws of exponents, find $6^{15} \div 6^{10}$

20. Express in standard form 3186500000

Section C

[Each question carries 3 marks]

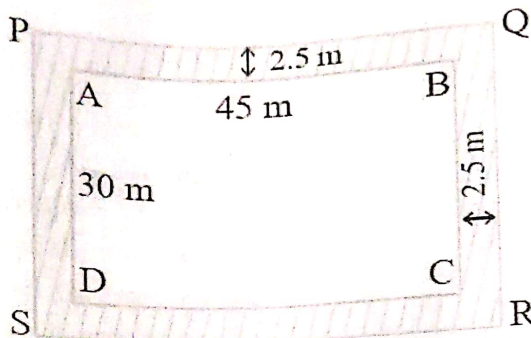
21. A tree is broken at a height of 5m from the ground and its top touches the ground at a distance of 12m from the base of the tree. Find the original height of the tree.
22. The population of a city decreased from 25000 to 24500. Find the percentage decrease.
23. List three rational numbers between $\frac{1}{2}$ and $\frac{2}{3}$
24. Construct a right-angled triangle whose hypotenuse is 6 cm long and one of the legs is 4 cm long.
25. $\triangle ABC$ is right angled at A. AD is perpendicular to BC. If $AB = 5$ cm, $BC = 13$ cm and $AC = 12$ cm, Find the area of $\triangle ABC$. Also find the length of AD.



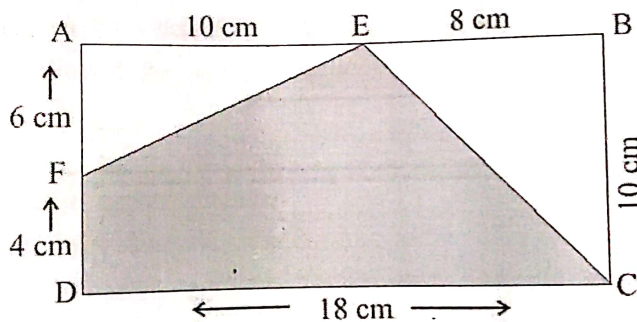
Section D

[Each question carries 5 marks]

31. (i) Chalk contains calcium, carbon and oxygen in the ratio 10:3:12. Find the percentage of carbon in chalk.
 (ii) If in a stick of chalk, carbon is 6g, what is the weight of the chalk stick?
32. A rectangular park is 45 m long and 30 m wide. A path 2.5 m wide is constructed outside the park. Find the area of the path.



33. In the following figure, find the area of the shaded portions:



34.

a) Simplify:

$$\frac{3^5 \times 10^5 \times 25}{5^7 \times 6^5}$$

3 Marks

b) From the sum of $3x - y + 11$ and $-y - 11$ subtract $3x - y - 11$

2 Marks

ANNUAL PROMOTION EXAMINATION — 2019

CLASS — VII

ENGLISH

Max.Marks-80

Time:-2.30 Hrs.

General instructions: -

1. The question paper consists of four sections:
Section (A) - Reading Skills (20 Marks)
Section (B) - Writing Skills (20 Marks)
Section (C) - Grammar (20 Marks)
Section (D) - Literature (20 Marks)

2. Please attempt all the question in order.

(20 Marks)

Q.1 Read the given passage carefully :

Section (A) - Reading Skills

(7 M)

In a desert there is sand all over. There are no roads, not even a track to follow. But a caravan winds its way forward through the desert without stopping. A string of camels laden with goods is called a caravan. Although landrovers and small aeroplanes are now used in some desert places but caravans are still a common sight. The camel is the ideal animal to be used in a desert because it has very wide feet that do not sink into the, sand. Camels can go for several days without water, using fat stored in their humps to keep them alive. The vast desert looks like an ocean of sand and that is why camels are often called ships of the desert.

On the basis of your reading of the passage, complete the following statements: •

1. A caravan is _____
2. Desert looks _____
3. Camel can walk easily on sand because _____
4. Camels remain alive for several days without water _____
5. The word TRACK means _____
6. The vast desert looks like _____
7. Although landrovers and small aeroplanes are now used _____

Q.2 Read the passage given below and answer the questions that follow:

(8M)

Water is one of the most important natural resources. With the rising population, there has been an increasing pressure on this earth's resource. Scarcity of water has been felt throughout the country. Efforts have been made to collect water by building dams. Wells have also been dug to create ground water structure. But that is not enough. Wise conservation of water is needed. One of the most popular ways of conservation is rainwater harvesting. It means collecting rainwater on the roofs of buildings and storing it underground for later use. This method can also raise the level of underground and increase water supply. Water from kitchens and bathrooms is collected and cleaned. It can then be used for purposes other than drinking.

Read the questions given below and then answer the questions selecting from the options which you consider the most appropriate.

1. What efforts have been made for the collection of water ?
(i) dams have been built (ii) wells have been dug
(iii) rain water is being harvested (iv) both (i) and (ii)

2. **Increasing pressure on water resource is**
 - (i) rise in population
 - (ii) melting of glaciers
 - (iii) wastage of water
 - (iv) more wells have been dug.
3. **Two methods for conservation of water are**
 - (i) rainwater harvesting and waste water harvesting
 - (ii) improving the ground water level
 - (iii) maintaining the public water supply
 - (iv) digging more wells and building more dam
4. **Advantage of rain water harvesting is**
 - (i) it is easy
 - (ii) it is simple
 - (iii) it raises the level of ground water
 - (iv) it saves money
5. **The word 'gather' in the passage means**
 - (i) raise
 - (ii) scarcity
 - (iii) store
 - (iv) collect
6. **Water is _____**
 - (i) most important natural resource
 - (ii) over the bridge
 - (iii) Used for making lead
 - (iv) not at all important.
7. **Give the opposite of:-**
 - (i) wise
 - (ii) increasing

Q. 16. Read the poem carefully:

(5 M)

POETRY BY TENNYSON

Ring out, wild bells, to the wild sky.
 The flying cloud, the frosty light:
 The year is dying in the night;
 Ring out, wild bells, and let him die.
 Ring out the old, ring in the new,
 Ring, happy bells, across the snow:
 The year is going, let him go;
 Ring out the false, ring in the true.
 Ring out the grief that saps the mind,
 For those that here we see no more;
 Ring out the feud of rich and poor,
 Ring in redress to all mankind.
 Ring out a slowly dying cause,
 And ancient forms of party strife;
 Ring in the nobler modes of life,
 With sweeter manners, purer laws.

Read the questions given below and write the option you consider the most appropriate

1. The holiday associated with these lines is :
 - (a) Thanks giving
 - (b) Christmas
 - (c) New Year
 - (d) Summer

2. Poet wants the New year to bring _____.
- (a) happiness and joy (b) sweet manners and purer laws
(c) truth (d) all the above
3. Feud is _____.
- (a) an ongoing quarrel with bad feelings on each side
(b) a game that creates feelings of comfort
(c) a waterway that is similar to a deep river
(d) a home with separate living quarters for servants
4. "Redress" in the poem means _____.
- (a) to get dressed again, to change clothes
(b) clothing worn by an older person
(c) making up for a wrong or injustice
(d) playing holiday music
5. The word which means the opposite of "modern" is _____.
- (a) happy (b) noble
(c) strife (d) ancient

Section – B

Writing Skills (20 Marks)

- Q.1 You are a reporter working for The Hindustan Times. Write a report on the final match of the Inter-School Cricket Cup held in the Shivaji Stadium of your city. (7 M)
- Q.2 You found a tiffin box in the school playground. Write a notice to put up on the school notice board to inform the students about the tiffin box and how the owner can retrieve it from you. (6 M)
- Q.3 (a) You are Shahrukh Khan a student of class 7 D. Write an application to the Principal requesting her to grant you permission to participate in a cultural show organized by the famous club of your city. (7 M)

OR

- (b) Write a letter to your father requesting him to engage a tutor for you.

Section – C

Grammar

(20 Marks)

(2 M)

- Q.1 Fill in the blanks with the correct prepositions.
- One day, a little lamb followed Ira _____ the orchard to the stream.
 - She saw the little lamb trying to balance itself _____ the pebbles and stones.
- Q.2 Rearrange the letters in brackets to make collective nouns and use them to fill in the blanks. (3 M)
- A _____ of birds is flying south. (foclk)
 - The _____ of mountains was covered with snow. (anrge)
 - Many people from the _____ rushed to help the man as he fell off his bicycle. (rcowd)
- Q.3 Fill in the blanks with a, an or the. (3 M)
- _____ tea seems to be of very good quality.
 - _____ hour ago I saw umbrellas lying on _____ wooden bench.

Q.4 Underline the verbs in these sentences. Identify them as finite or non-finite and write. (3 M)

1. Mother drives to her office every day.
2. A caterpillar changes into a butterfly.
3. Eating together is enjoyable.

Q.5 Fill in the blanks with the present perfect tense of the verbs in the brackets. (3 M)

1. Nivedita _____ all the cherries. (eat)
2. Mummy _____ away the old oven because she bought a new one. (give)
3. Shela _____ out for the day with her friends. (go)

Q.6 Fill in the blanks with the correct adverbs from the brackets. (3 M)

1. Rajdeep is feeling _____ better today. (very, much)
2. Joseph will _____ help you with your experiment. (surely, safely)
3. We are _____ late for the movie. (already, enough)

Q.7 Fill in the blanks using conjunctions. (3 M)

1. We were lost _____ we took a wrong turn.
2. It was raining heavily _____ the players continued to play.
3. We are very hungry _____ we just had a snack on the way.

Section – D

Literature

(20 Marks)
(4 M)

Q.1 Word meaning.

1. abhor 2. steed 3. prodigal 4. enunciates

Q.2 Read the sentences and answer the questions.

1. "My own garden is my own garden".
 - a. Who said these words and why? (1M)
2. Pestonjee was fooling the farmers.
 - a. Who was Pestonjee? (1 M)
 - b. How was he fooling the farmers? (2 M)
 - c. Who helped the farmers and how? (2 M)

Q.3 Answer these questions briefly : (Any three) (6 M)

1. Why were the people of Hamelin worried?
2. What was the ghost's reaction to the Colonel's attitude?
3. What would flatterer say if one is wasteful?
4. What logic did the glow-worm use to persuade the nightingale not to eat him?

Q.4 Answer the following in about (40-50) words.

Q.1 Describe Mr. Don Quixote.

OR

Q.2 Describe Higgins and Eliza.

(4 M)

Q1. Answer the following in one sentence.

1. What is the amount of solar energy received by the Earth called?
2. What are the species of animals found on the earth referred to as?
3. What are the tropical rainforests also known as?
4. The Ganga basin experiences which type of climate?
5. What were 'Chaurasis'?
6. Mian Tansen composed which famous Raga?
7. What was the council of eight ministers under Shivaji called?
8. Which Sikh ruler established a powerful kingdom in Punjab?
9. What has media evolved for itself?
10. People engaged in which trade are called retailers?
11. According to the modern concept of marketing, what is the key to success?
12. Who are expected to take on their future role of caretakers from their early days?
13. India has had a tradition of tolerance and what?
14. Besides justice, liberty, equality, what does our constitution try to promote?
15. Where did the people belonging to the Khokhar tribe live?
16. Under which ruling dynasty did Kathak become a form of entertainment?
17. Shivaji captured many forts using which warfare?
18. Plants and animals provide moisture to the atmosphere through what?
19. What is the headstream of the Amazon river called?
20. Write the word which means that one fulfils his or her responsibilities.

30 Marks

Q2. Answer the following in short

1. What are the main elements of weather and climate?
2. Describe the location and extent of the Amazon basin.
3. What do you know about the life of the nomadic tribal groups?
4. Which language is known as the 'camp language'? Why?
5. Who were the king makers? Why are they called so?
6. How does media protect the democratic interests of the people?
7. Discuss any two major areas of discrimination against women in India.
8. How does religion play an important role in the formation of public opinion?
9. Distinguish between dictatorship and democracy.
10. How is the modern concept of marketing different from the traditional concept?

12 Marks

Q3. Answer the following questions in details

1. Describe the location and extent of the Ganga-Brahmaputra basin.

OR

Describe the main features of planetary winds.

2. Who were Peshwas? How did they strengthen the Maratha power?

OR

Discuss the development of Persian literature in the medieval period.

3. Explain how gender inequality is closely linked to other forms of social inequality.

OR

How can religions help in the working of a democratic government?

10 Marks

Q4. Draw a well labelled diagram of:-

1. Process of heat transfer.

2. Three states of water.

8 Marks

Q5. On the map of India given mark and label the following

1. Allahabad
2. Kolkata
3. Lucknow
4. Patna

5. Himalayas
6. River Ganga
7. Sundarbans
8. River Brahmaputra

Name

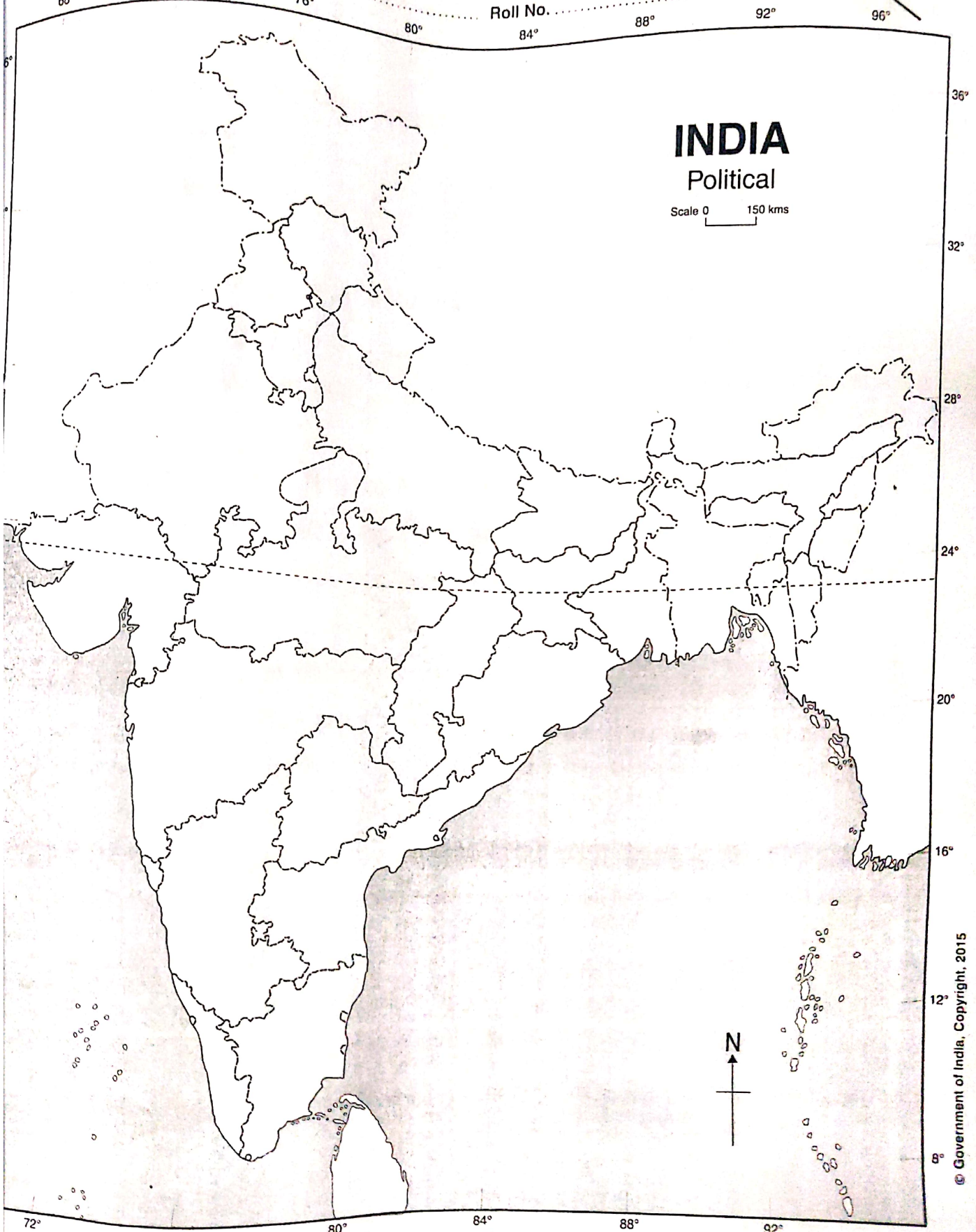
Std.

Div.

Date

Roll No.

YOUVA



INDIA

Political

Scale 0 150 kms

© Government of India, Copyright, 2015



1. The responsibility for the correctness of internal details rests with the publisher. 2. The territorial waters of India extend into the sea to a distance of twelve nautical miles measured from the appropriate base line. 3. The administrative headquarters of Chandigarh, Haryana and Punjab are at Chandigarh. 4. The state boundaries amongst Arunachal Pradesh, Assam and Meghalaya shown on this map are as interpreted from the "North-Eastern Areas (Reorganisation) Act, 1971," but have yet to be verified. 5. The external boundaries and coastlines of India agree with the Record/Master Copy certified by the Survey of India. 6. The state boundaries between Uttarakhand & Uttar Pradesh, Bihar & Jharkhand and Chattisgarh & Madhya Pradesh have not been notified by the Governments concerned. 7. The spellings of names in this map have been taken from various sources.

PROMOTION EXAMINATION - 2019

SANSKRIT

CLASS - VII

Time-2:30 Hrs

M.M-80

- प्र.1 (अ) कोष्ठक में दिए गए उचित धातुरूपों से खाली स्थानों को पूर्ण करें - 2
- 1 अहं पुस्तकं । (पठामि, पठति, पठन्ति)
- 2 वृद्धाः उपवने । (भ्रमन्तु, भ्रमति, अभ्रमत्)
- (ब) कोष्ठक से लोट्लकार का उचित शब्द चुनकर खाली स्थानों को पूर्ण कीजिए - 2
- 1 पिता पुत्राय पत्रं । (लिखतु, लिख, लिखानि)
- 2 अहं प्रतिदिनम् उद्याने । (भ्रमत, भ्रमाव, भ्रमानि)
- (स) नीचे लिखे पदों से भिन्न प्रकृति के शब्द को अलग कर लिखिए - 2
- 1 सुगीता, कृतज्ञता, दरिद्रता, सुन्दरता ।
- 2 धर्मः पयः, दीपकः सुपुत्रः ।
- प्र.2 (अ) रेखांकित पदों का निर्देशानुसार लकार परिवर्तित कर लिखिए - 2
- 1 कणिका भोजनं खादतु। (लङ्लकारे)
- 2 त्वं उच्चैः हससि। (लोट्लकारे)
- (ब) वर्णसंयोग कीजिए - 2
- 1 वरम्+आधौ-
- 2 सत्यम्+एव-
- (स) नीचे लिखे रेखांकित पदों को शुद्ध कर लिखिए - 3
- 1 सुशीलः एकं सुन्दरं बालकः अस्ति ।
- 2 हरिद्वारे पवित्रः गङ्गा/गंगा नदी अस्ति ।
- 3 वयं क्रीडाक्षेत्रे क्रीडानि ।
- प्र.3 (अ) धातुरूप लिखिए - 3
- गम् - लोट्लकार - प्रथम पुरुष - तीनों वचनों में

(ब) शब्द रूप लिखिए—
लता - प्रथमा

— तीनों वचनों में

3

(स) नीचे लिखे पदों के विभक्ति वचन और लिङ्ग लिखिए —
विभक्ति वचन लिङ्ग

- 1 निद्रया -
- 2 मूर्खाणाम् -

प्र.4 (अ) कोष्ठक में दिए गए पदों में उचित विभक्ति का प्रयोग कर लिखिए —

3

- 1 हीनाः पशुभिः समानाः । (धर्म , तृतीया)
- 2 सीता पत्नी आसीत् । (राम, षष्ठी)
- 3 अयोध्यायाः दशरथः आसीत् । (राजन् , प्रथमा)

(ब) रेखांकित शब्दों को आधार मानकर प्रश्न निर्माण कीजिए —

3

- 1 संस्कृतभाषायां चत्वारः वेदाः सन्ति ।
- 2 'फुल्लोत्पल' नाम सरोवरः मगधदेशे आसीत् ।
- 3 एकदा सरोवरस्य जलमशुष्यत् ।

(स) मजूषा से विलोम शब्द चुनकर शब्द के सामने लिखिए —

3

अधः , सज्जनः , वियोज्य

- 1 संयोज्य -
- 2 उच्चैः -
- 3 दुर्जनः -

प्र.5 (अ) निर्देशानुसार वचन परिवर्तित कर लिखिए —

4

- 1 त्वम् उद्याने भ्रम । (बहुवचने)
- 2 ते प्रतिदिनम् उद्याने भ्रमन्तु । (एकवचने)
- 3 बालकः सदा सत्यं वदतु । (द्विवचने)
- 4 बालः शिष्टाचारपालनं करोतु । (बहुवचने)

प्र.7

(ब) उचित धातुरूपों से खाली स्थानों को पूर्ण करें -

1	हस् धातु: (प्रथम पुरुष: एक वचन)	लट्लकारे	लड.लकारे
2	गम् धातु: (मध्यम पुरुष: बहुवचन)
3	भू धातु: (मध्यम पुरुष: द्विवचन)
4	प्रच्छ् धातु: (प्रथम पुरुष: बहुवचन)

(स) निर्देशानुसार शब्द रूप , धातु रूप लिखिए -

1	पठ् - प्रथम पुरुष	- लोट्लकार	- एकवचन
2	लिख् - मध्यम पुरुष	- लृट्लकार	- बहुवचन
3	मति - द्वितीया विभक्ति	- बहुवचन	
4	कवि - तृतीया विभक्ति	- एकवचन	

6 (अ) नीचे लिखे प्रश्नों के उत्तर पूर्ण वाक्य में दीजिए -

- 1 धनं कथं प्राप्नोति ?
- 2 ताजमहलं कदा निर्मितम् ?
- 3 धीमतां कालः कथं गच्छति ?
- 4 एकदा ग्रीष्मर्तौ किमभवत् ?

(ब) नीचे लिखे वाक्यों में संख्या का समुचित प्रयोग करते हुए खाली-स्थानों को पूर्ण करें -

- 1 छात्राः भ्रमन्ति । (पाँच)
- 2 पुस्तकानि । (चार)
- 3 पत्रं पतति । (एक)
- 4 सप्ताहे दिनानि भवन्ति । (सात)

(स) नीचे दी गई संख्याओं को संस्कृत में लिखिए -

- (क) 20 (ख) 16 (ग) 30 (घ) 38

प्र.7 (अ) नीचे लिखे शब्दों का सन्धि विच्छेद कीजिए -

- 1 परोपकारः - 3 धनाभावे -

(ब) नीचे दी गई सूक्ति का अनुवाद लिखिए -

- 1 विषं सभा दरिद्रस्य ।
- 2 मौनं स्वीकृति लक्षणम् ।
- 3 धर्मेण हीनाः पशुभि समानाः ।
- 4 संतोषतुल्यं धनमस्ति नान्यत् ।

(स) नीचे दिए गए श्लोक का अनुवाद लिखिए -

प्रियवाक्यप्रदानेन सर्वे तुष्यन्ति जन्तवः ।
तस्मात् प्रिय हि वक्तव्यं वचने का दरिद्रता ॥

प्र.8 (अ) नीचे दी गई पंक्तियों का अनुवाद लिखिए -

ऋग्वेदः, यजुर्वेदः सामवेदः, अथर्ववेदः च चत्वारः वेदाः
संस्कृतभाषायामेव सन्ति । संस्कृते एवं उपनिषदः, पुराणानि,
नीतिशास्त्राणि, धर्मशास्त्राणि च सन्ति ।

(ब) नीचे लिखे प्रश्नों के उत्तर एक पद में दीजिए -

- 1 रामायण केन रचितम् ?
- 2 'फुल्लोत्पल' नाम सरोवरः कुत्र आसीत् ?
- 3 सुपुत्र कः भवति ?
- 4 कः सर्वत्र पूज्यते ?
- 5 कः कुक्कुरात् बिभेति ?

(स) नीचे दिए गए शब्दों के अर्थ लिखिए -

- 1 व्याघ्रः -
- 2 प्रदोषे -
- 3 सरः -
- 4 सूक्तयः -
- 5 हितकारकः -

प्र.1 निम्नलिखित गद्यांश को पढ़कर दिए गए प्रश्नों के सही विकल्प का चयन कीजिए –: 5

खण्ड – 'अ'

साहस की जिंदगी रोमांचक होती है। ऐसी जिंदगी की सबसे बड़ी पहचान यह है कि साहसी व्यक्ति इस बात की चिंता नहीं करता कि तमाशा देखने वाले लोग उसके बारे में क्या सोचते हैं। जनमत की उपेक्षा करके जीने वाला आदमी दुनिया की असली ताकत होता है और दुनिया को प्रकाश भी उसी से मिलता है। अड़ोस-पड़ोस को देखकर चलना साधारण जीव का काम है। क्रांति करने वाले लोग अपने उद्देश्य की तुलना न तो पड़ोसी के उद्देश्य से करते हैं और न अपनी चाल को ही पड़ोसी की चाल देखकर मद्धिम बनाते हैं।

1 उपर्युक्त गद्यांश का सही शीर्षक दीजिए।

- (i) साहस (ii) साहस की जिंदगी (iii) जिंदगी (iv) साहसी व्यक्ति।

2 साहसी की जिंदगी की सबसे बड़ी पहचान क्या हाती है ?

(i) साहस की जिंदगी रोमांचक होती है।

(ii) साहसी व्यक्ति निडरता से जीता है वह इस बात की चिंता नहीं करता कि लोग उसके बारे में क्या कहेंगे।

(iii) साहसी जिंदगी जीने वाले लोग कर्मठ होते हैं।

(iv) साहसी जिंदगी जीने वाले हठ के पक्के होते हैं।

3. कैसा आदमी दुनिया की असली शक्ति होता है ?

(i) अपनी मरजी से जीने वाला। (ii) जनमत की उपेक्षा करने वाला।

(iii) क्रांति करने वाला। (iv) लोगों की बात मानने वाला।

4. क्रांति करने वालों की क्या विशेषता होती है ?

(i) हरदम क्रांति की बातें करते हैं।

(ii) हरदम क्रांति करने के लिए तैयार रहते हैं।

(iii) क्रांति करने वाले किसी की परवाह किए बिना अपने उद्देश्य की ओर बढ़ते हैं।

(iv) वे पड़ोसियों की भावनाओं से प्रभावित होते हैं।

5. निम्न शब्दों के विलोम शब्द का सही विकल्प छाँटिए—

(i) साहसी— (क) हिम्मती, (ख) आलसी, (ग) डरपोक

(ii) प्रकाश— (क) रोशनी, (ख) अंधकार, (ग) अँधेरा

प्र.2 पत्र लेखन - शुल्क-मुक्ति हेतु-प्रार्थना पत्र

प्र.3 निम्नलिखित में से किसी एक विषय पर लगभग (200) शब्दों में निबंध लिखिए -:

(1) मेरा प्रिय खेल क्रिकेट

प्र.4 (1) निम्नलिखित शब्द का पर्यायवाची शब्द लिखिए - (दो)

वसंत -

(2) निम्न शब्द का विलोम शब्द लिखिए -

परमार्थ x

(3) अनेक शब्दों के लिए एक शब्द लिखिए-

जिसके समान कोई दूसरा न हो -

(4) अनेकार्थक शब्द लिखिए - (दो)

सुधा -

(5) निम्नलिखित शब्द का श्रुतिसम भिन्नार्थक शब्द लिखिए -

शील - सील -

(6) निम्न शब्द का समूहवाची शब्द लिखिए -

कुंज -

(7) निम्नलिखित मुहावरे का अर्थ लिखिए -

हवाई किले बनाना -

प्र.5 (1) सही शब्द छाँटकर खाली स्थान भरिए -
(यौगिक, दिशा, कालवाचाक)

1 जिन शब्दों से क्रिया के होन का पता चलता है उसे विशेषण कहते हैं ।

2 क्रिया विशेषण अन्य शब्दों में प्रत्यय लगाकर या समास द्वारा बनते हैं ।

3 जिन शब्दों से क्रिया के स्थान या का बोध होता है, उसे स्थानवाचक क्रिया विशेषण कहते हैं ।

(2) नीचे दिए गए वाक्यों में संबंधबोधक छाँटिए -

(1) वह मेरे घर के निकट रहता है ।

(2) राजेश अमर की अपेक्षा बलवान है ।

- (3) नीचे दिए गए वाक्यों में समुच्चय बोधक छाँटिए और उनका भेद लिखिए - 2
- (1) यदि तुम परिश्रम करोगे तो अवश्य सफल होंगे।
 (2) अक्षत और सौम्या टहलने जाते हैं।
- (4) सही कथन पर (✓) और गलत कथन पर (X) का निशान लगाइए - 2
- (1) 'सावधान'! क्रोधबोधक शब्द है।
 (2) 'अच्छा'! स्वीकृतिबोधक शब्द है।
- (5) निम्नलिखित वाक्यों को (✓) शुद्ध करके पुनः लिखिए - 2
- (1) प्रातःकाल के समय टहलना स्वास्थ्य प्रद होता है
 (2) तस्वीर को दीवार में लगा दो।
- (6) निम्नलिखित वाक्यों को निर्देशानुसार बदलिए- 4
- (1) वह यहाँ आया और चला गया। (सरल वाक्य)
 (2) बच्चा रो-रोकर चुप हो गया। (संयुक्त वाक्य)
 (3) रोजी ने दवाई पीते ही कै कर दी। (मिश्र वाक्य)
 (4) धनी व्यक्ति हर वस्तु खरीद सकता है। (मिश्र वाक्य)

खण्ड - ब

प्र.6 नीचे दिए पद्यांश को पढ़कर दिए गए प्रश्नों के उत्तर लिखिए :- 5

बरसे बदरिया सावन की।

सावन की, मन-भावना की।।

सावन में उमग्यो मेरो मनवा, भनक सुनी हरि आवन की।

उमड़-घुमड़ चहुँदिस से आया, दामिन दमकै झर लावन की।।

नन्हीं-नन्हीं बूँदन मेहा बरसे, शीतल पवन सुहावन की।

मीरा के प्रभु गिरधर नागर! आनंद - मंगल गावन की।।

- (1) इस कविता की कवयित्री कौन है ?
 (2) इस कविता में किसके आने की भनक सुनी ?
 (3) चारों ओर क्या चमक रही है ?
 (4) क्या गाने का समय है ?
 (5) मीरा के प्रभु कौन है ?

प्र.7 निम्नलिखित शब्दों के अर्थ लिखिए -

- (1) हुकूमत (2) ग्रीवा (3) न्योता (4) निखालिस (5) सबक

प्र.8 निम्नलिखित खाली को भरिए -

- (1) साँस लेने पर शुद्ध वायु से जो ऑक्सीजन प्राप्त होती है, उसे शरीर के हर हिस्से में का पहुँचाते हैं।
(2) मास्टर जी कक्षा में का पाठ पढ़ा रहे थे।
(3) बड़े मियाँ लेखिका को कहकर पुकारते थे।
(4) सोनपुर का मेला एशिया का सबसे बड़ा मेला माना जाता है।
(5) 'नीलकण्ठ' पाठ की लेखिका का नाम है।

प्र.9 निम्नलिखित वाक्यों के सामने सही (✓) या गलत (X) का चिह्न लगाइए -

1. भारतीय सैनिकों ने 11 मई 1857 को औरंगजेब को भारत का शासक घोषित किया।
2. रक्त में सफेद कणों की कमी को एनीमिया कहते हैं।
3. यासुकी चान का घर कुहोन्बुत्सु में था।
4. खानपान की बदलती संस्कृति ने सबसे, अधिक नई पीढ़ी को प्रभावित किया है।
5. विदेशी महिलाएँ नीलकण्ठ को परफैक्ट जैन्टिलमैन कहकर पुकारती थी।

प्र.10 (अ) निम्नलिखित प्रश्नों के उत्तर लिखिए -

1. रक्त में हीमोग्लोबिन के लिए किस खनिज की आवश्यकता पड़ती है ?
2. कवि ने मनुष्य के शरीर की तुलना किससे की है ?
3. गोपियों के कंगन क्यों झनक रहे हैं ?
4. एक तिनका कविता में कवि ने कैसे व्यक्ति के बारे में बताया है ?

प्र.11 निम्नलिखित प्रश्नों के उत्तर लिखिए -:

- 1 सावन की ऋतु की विशेषताएँ लिखो।
2 खानपान में बदलाव के कौन-से फायदे हैं ?
3 यासुकी-चान को अपने पेड़ पर चढ़ाने के लिए तोतो-चान ने अथक प्रयास क्यों किया ?
4 'इस आनंदोत्सव की रागिनी में बेमेल स्वर कैसे बज उठा - वाक्य किस घटना की और संकेत कर रहा है ?

Time: - 2½ Hours

Promotion Examination - 2019
Computer Science
Class - VII

MM: 80

Fill in the blanks.

(2x6=12)

- a) _____ command confines the data in one cell and in multiple lines.
b) The _____ function finds the largest value from the set of specified cells.
c) The individual page in a presentation is called a _____.
d) Every computer on the internet has a name called the _____.
e) A computer _____ is a software program with the ability to reproduce itself.
f) The SUM button is available under the _____ tab.

Give answers in one word.

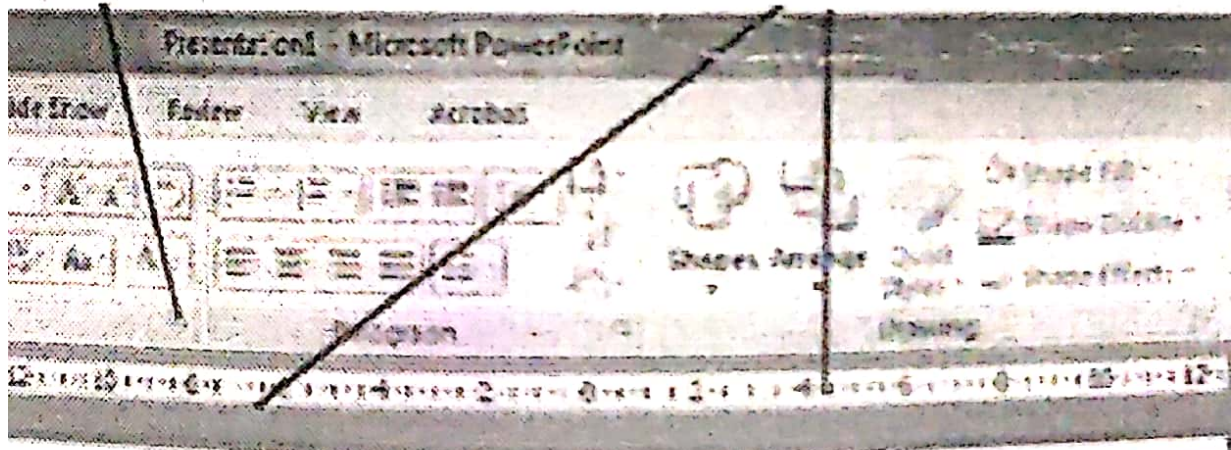
(2x6=12)

- a) It is a virus that infect the system of hard disks & floppy disks. _____
b) It is a personalised text file added at the end of the outgoing message. _____
c) A series of slide displayed one by one on the screen. _____
_____ calculation. _____

nd Bcc option?

nd limitations of a computer virus?

OINT window given below.



Click to add title

Click to add subtitle

ANNUAL PROMOTION EXAMINATION – 2019

CLASS – VII

SUBJECT – SCIENCE

TIME – 2: 30 Hrs.

Max Marks -80

Note – All questions are compulsory

There are four sections.

Section A: 10 questions of 1 Mark each.

Section B: 10 questions of 2 Marks each.

Section C: 10 questions of 3 Marks each.

Section D: 4 questions of 5 Marks each.

SECTION – A

Fill in the blanks :-

1. A Flower may have either male or female reproductive part. Such a flower is called _____.
2. The long line in the symbol for a cell represents its _____ terminal.
3. The safety device based on the heating effect of electric current is called a _____.
4. The rhythmic expansion and contraction of the heart is called _____.
5. Arteries and veins are joined by a network of _____.
6. An images formed by a concave _____ cannot be obtained on a screen.
7. The insects, butterflies and birds help flowering plants in _____.
8. The decaying leaves and animal droppings in a forest enrich the soil with _____.
9. An image that cannot be obtained on a screen is called a _____ image.
10. Herbs form the _____ layer in the forest.

SECTION – B

Short Answer.

1. What is water table?
2. What is lateral inversion?
3. What is meant by the term aquifer?
4. Explain why there is no waste in a forest.
5. Give any two effects of electric current.
6. Give any two differences between concave and convex lens.
7. Explain how forests prevent floods.
8. Why is transport of materials necessary in a plant or in an animal?
9. Give the full form of.
M.C.Bs _____
C .F. Ls _____
10. What is fragmentation?

SECTION – C

1. What are decomposers? Name any two of them. What do they do in the forest?
2. What is an electromagnet? Give any two uses of it.
3. Why do we get muscle cramps after heavy exercise?
4. Explain how animals dwelling in the forest help it to grow and regenerate.
5. Explain how groundwater is recharged?
6. Give the three functions of stomata.
7. Write the differences between self and cross pollination.
8. What are the factors responsible for the depletion of water table? Explain anyone.
9. Give any three characteristics of images formed by a plane mirror.
10. Salma takes 15 minutes from her house to reach her school on a bicycle .If the bicycle has a speed of 2m/min. Calculate the distance between her house and the school.

SECTION – D

I. Name these –

- a. Motion of a child on a sea – saw _____
- b. A mature ovary forms a _____.
- c. The basic unit of speed is _____.
- d. Organs of respiration in insects are _____.
- e. One product that we get from the forest _____.

II. Give the name of the plants that shows the following type of reproduction –

1. Budding -
2. Eyes -
3. Fragmentation -
4. Spores -
5. Stem cutting -

III. Draw and Name 5 Electrical components and its symbols.

IV. Draw a neat well labelled diagrams of

- The Breathing system of a fish.
- Drip irrigation.